



# THE PRIME EXAMINATIONS 2022

## P.7 PRE - PLE TRIAL SET V

SOCIAL STUDIES AND RELIGIOUS EDUCATION (*Abridged Curriculum*)

Time allowed 2 hours 15 minutes

INDEX NO:

Random No.

Personal No.

--	--	--	--	--	--	--	--	--



Top up your  
classwork with  
Prime Learn

www.prime-learn.com

Candidate's Name: .....

Candidate's Signature: .....

School Random No. ....

District ID: .....

### READ THE FOLLOWING INSTRUCTIONS CAREFULLY

1. Do not write your **school** or **district** name anywhere on this paper.
2. This paper has **two** sections: **A** and **B** Section **A** has **40** questions and section **B** has **15** questions.
3. Answer **all** questions. **All** answers to both sections **A** and **B** must be written in the spaces provided.
4. **All** answers **must** be written using a **blue** or **black** ball point pen or ink. Any work written in pencil other than graphs and diagrams will **not** be marked.
5. Unnecessary **changes** in your work and handwriting that cannot easily be read may lead to **loss of marks**.
6. Do **not** fill anything in the table indicated "For **Examiners' use only**", and those boxes inside the question paper.

### FOR EXAMINERS' USE ONLY

QUESTION NUMBER	MARKS ATTAINED	INITIALS
1 - 10		
11 - 20		
21 - 30		
31 - 40		
41 - 43		
44 - 46		
47 - 49		
50 - 52		
52 - 55		
53 - 55		

APPROVED:

  
Consultant

Social Studies Department (PEC)


PUBLISHERS OF:

THE PRIME; SCHEMING FRAME WORKS, PUPILS' WORKBOOKS, LESSON COURSE BOOKS,  
HOLIDAY PACKAGES, LEARNING GAMES AND MORE...

**Section A. (40 Marks)**

1. Name the mountain in Southern Africa which was formed by folding.
2. How are **louvres** useful on a **Stevenson** screen?
3. What term refers to the **steady increase in the number of people in an area**?
4. Mention the political party which led **Tanganyika** to independence.
5. Give any **one** importance of cultural festivals in the community.
6. Which ministry is responsible for **building and maintaining roads** in Uganda?
7. Give any **one** way how **Sir Hesketh Bell** contributed to the economic development in Uganda.
8. Give any **one** reason why it was necessary for the East African countries to revive the East African community.
9. What is the immediate effect of widespread charcoal making on the environment?
10. Mention the major crop grown on **Mubuku irrigation scheme** in Uganda.
11. Give **one** way how relief agencies care for the people affected by landslides in Uganda.
12. In which way was **Semei Kakungulu** helpful to the British in Uganda?
13. State any **one** way in which democracy is practiced in schools.
14. Mention **one** factor that makes lumbering to be done in the **Democratic Republic of the Congo**.
15. Give the meaning of the term **altitude**.
16. Mention any **one** economic challenge hindering development in Africa.
17. How is **pyrethrum** useful to rural famers in Uganda?

The diagram below shows the formation of rain. Study it carefully and use it to answer questions 16 to 18.



18. Name the type of rainfall shown in the diagram above.
19. Which factor causes rainfall to be received in region A on the diagram?
20. Why is human settlement difficult in region marked B?
21. State any one function of East African Development Bank.
22. Mention any one tourist attraction found in Libya and not in Uganda.
23. Give any one reason why Kwame Nkrumah is remembered in the history of Ghana.
24. Name the largest producer of oil in Africa.
25. Mention any one way a P.7 child can get information about the past.
26. Give any one common cause of accidents on Uganda's roads today.
27. Who was the first European explorer to reach Lake Victoria in Uganda?
28. State any one importance of the National Environment Management Authority to the government of Uganda.
29. How do people in desert areas protect their houses from strong winds?
30. Mention the first form of money to be used in East Africa.
31. Which term is used to refer to a small river that drains into the main river?

32. State any one danger caused by poor waste disposal in the environment.
33. Mention any one town in East Africa where crude oil is refined.
34. Name the body of water which separates Madagascar from Africa's main land.
35. Why is agriculture a very important economic activity in Uganda?

For questions 36 to 40, answer either Christianity or Islamic questions but not both in a number.

36. Either: Mention any one similarity between Christianity and Islam.

Or: Mention any one similarity between Islam and Christianity.

37. Either: Name the day that marks the beginning of fasting in Christianity.

Or: What event marks the beginning of fasting in Islam?

38. Either: According to the Bible, what is the greatest commandment?

Or: According to Islamic teaching, what is the greatest pillar?

39. Either: What lesson do you learn from the story of Prophet Noah?


Or: What lesson do you learn from the story of Prophet Nuhu?

40. Either: Mention any one way a Christian child can show friendship to others.

Or: Mention any one way a Muslim child can show friendship to others.

**Section B (60 Marks)**

41. The diagram below shows the Uganda National flag. Use it to answer the questions that follow.



(a) Name the colour marked B on the above flag.

(b) Which letter represents the colour that symbolises international brotherhood?

(c) What does the bird shown in the center of the diagram above represent?

(d) When is the National flag of Uganda flown at half-mast?

42. (a) Give any two ways in which the government gets its income.

(i) \_\_\_\_\_

(ii) \_\_\_\_\_

(b) Give any two ways the government spends its income.

(i) \_\_\_\_\_

(ii) \_\_\_\_\_

43. (a) Where did the Nilotics first settle when they came in Uganda?

(b) Mention one tribe which belongs to the Nilotics in Uganda.

(c) Give any two reasons why the Nilotics left their cradle land.

(i) \_\_\_\_\_

(ii) \_\_\_\_\_

44. (a) Who was the official representative of IBEACO in Uganda?

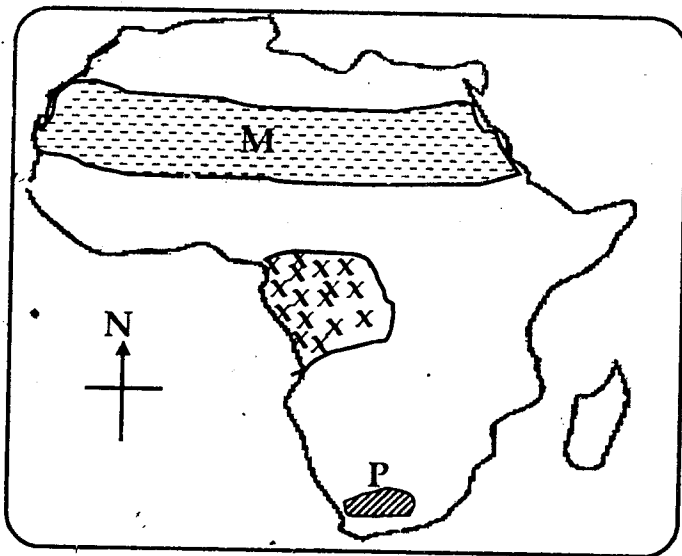
(b) Give any two ways how the IBEACO helped the British to colonise Uganda.

(i) \_\_\_\_\_

(ii) \_\_\_\_\_

(c) Give any one reason why the IBEACO failed to rule Uganda.

45. Study the sketch map of Africa below and use it to answer the questions that follow.



(a) Mention the major activity carried out in the area marked P.

(b) Describe the climate of the shaded area marked M.

(c) Why are trees in region marked XX ever green?

(d) Apart from climate, give one other reason why there are different types of natural vegetation in Africa.

46. Give any two reasons why good roads are very important in the rural areas of Uganda.

(i)

(ii)

(b) State any two challenges affecting road transport in rural areas.

(i)

(ii)

47. (a) What is meant by **indirect rule** as used by the British in Uganda?

(b) Mention any one way indirect rule was practiced in Uganda.

(c) Give any two reasons why the British used indirect rule in Uganda.

(i)

(ii)

48. (a) What do you understand by the term **population density**?

(b) What is the population density of a town of area size 3500km<sup>2</sup> and a population of 210,000 people?

(c) State any two problems which people who live in towns face.

(i)

(ii)

49. (a) Give any two advantages **radios** have over **televisions** as means of communication.

(i)

(ii)

(b) Give any **two** ways how **radios** and **television** have promoted development in Uganda.

(i) \_\_\_\_\_

(ii) \_\_\_\_\_

50. (a) Which group of people was replaced by the **Bachwezi** in **Bunyoro Kitara**?  

(b) Give any **two** social contributions made by the **Bachwezi** in **Bunyoro Kitara**.

(i) \_\_\_\_\_

(ii) \_\_\_\_\_

(c) Why did the rule of the **Bachwezi** in **Bunyoro Kitara** come to an end?

**For questions 51 to 55, answer either Christianity or Islamic questions but not both in a number.**

51. **Either:** (a) Name the **two** materials used in Holy communion by Christians.

(i) \_\_\_\_\_

(ii) \_\_\_\_\_

(b) Why are the above materials important in Christianity?

(c) How is **Holy communion** important in the life of a Christian?

**Or:** (a) Name the month in which Muslims make a pilgrimage.

(b) State any **two** conditions which a Muslim should fulfill before he/she is allowed to make a pilgrimage.

(i) \_\_\_\_\_

(ii) \_\_\_\_\_

(c) Mention any **one** place that Muslims visit on a pilgrimage.

52. **Either:** (a) On which day of the week do Christians have general prayers?

(b) Why was the day named above chosen for general prayers?

(c) Mention any **two** things that general prayers promote among Christians.

(i) \_\_\_\_\_

(ii) \_\_\_\_\_

**Or:** (a) On which day of the week do Muslims have general prayers?

(b) Why was the day named above chosen for general prayers?

(c) Mention any **two** things that general prayers promote among Muslims.

(i) \_\_\_\_\_

(ii) \_\_\_\_\_

53. **Either:** (a) What to Christians remember about each of the following days?  
(i) Christmas day:

(ii) Easter day:

(iii) Good Friday:

(iv) Palm Sunday:

**Or:** Give any one reason why each of the following events are celebrated in Islam.

(i) Eid al-adha:

(ii) Eid-el-fitr:

(iii) Hejira:

(iv) Miraj:

54. **Either:** (a) How do people become members of God's family?

(b) When do Christians repent?

(c) Give any two benefits of repentance to Christians.

(i)

(ii)

**Or:** (a) How do people become members of the Muslim community?

(b) When do Muslims repent?

(c) Give any two benefits of repentance to Muslims.

(i)

(ii)

**For Both.**

55. (a) Give any two similarities between a Bible and a Quran.

(i)

(ii)

(b) Give any two ways in which both Christian and Islamic religious organisations have led to the development of Uganda.

(i)

(ii)



**Hidden Tip For Excellence in Social Studies.**

Look over the previous Examination Papers to identify patterns in questions.  
You can see how general or specific questions are likely to be.